



GEKPO GENIUS EXAM OF KIDS PRIMARY OLYMPIAD

**CLASS
1**

**Maximum Marks :
100**

**Duration :
90 Minutes**

**Total Question :
50**

INSTRUCTION FOR THE CANDIDATES

1. GEKPO exam is of 90 minutes duration
2. There are 50 questions in the test. Each question has only one option as CORRECT.
3. For filling up information about yourself on answer sheet.
4. Each question carries 2 marks.
5. All the questions are compulsory and there is no negative marking.
6. Use of calculator, mobile phone & any electronic gadgets is NOT allowed.
7. Write any one correct option in answer sheet.

Q.1) Which one of the following is a non-living thing?

- a) Copy
- b) Tiger
- c) Bird
- d) Rabbit

Q.2) Which of the following non-living things is made of plastic?

- a) Comb
- b) Cloth
- c) Pillow
- d) Towel

Q.3) The green part of a plant is _____

- a) Root
- b) Leaf
- c) Flower
- d) Stem

Q.4) Which of the following is not a tree?

- a) Coconut
- b) mango
- c) Neem
- d) Tulsi

Q.5) This is a big animal :

- a) Camel
- b) Ant
- c) Butterfly
- d) Sparrow

Q.6) Crocodile has _____ legs.

- a) Two
- b) Three
- c) Four
- d) One

Q.7) _____ helps us to listen to good music.

- a) Ears
- b) Nose
- c) Eyes
- d) Hands


Q.8) _____ is not a sense organ:

- a) Skin
- b) Nose
- c) Ear
- d) Brain

Q.9) Which of the following is a fruit?

- a) Milk
- b) Spinach
- c) Orange
- d) Pea

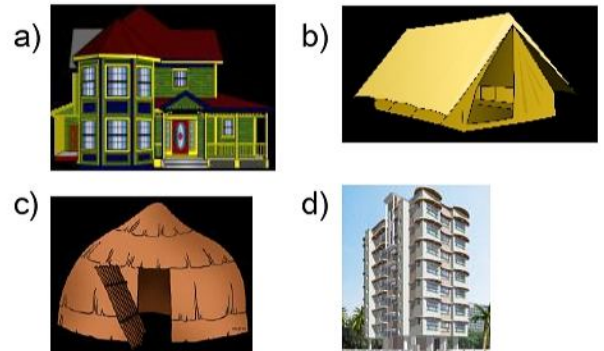
Q.10) Which of the following can be considered as healthy food?



Q.11) We sit together to eat in the _____

- a) Drawing room
- b) Study room
- c) Store room
- d) Dining room

Q.12) Identify tent house from the following options:



Q.13) The main source of water on earth is :

- a) Sea
- b) Rivers
- c) Rain
- d) Streams

Q.14) A kite needs _____ to fly.

- a) Water
- b) Air
- c) Soil
- d) Ice

Q.15) We should _____ in the class activities.

- a) Sleep
- b) Participate
- c) Not perform
- d) Not participate

Q.16) _____ traffic light means 'get ready'.

- a) Red
- b) Blue
- c) Yellow
- d) Green

Q.17) The sun shines brightly for months. It is called _____

- a) Winter
- b) Rainy day
- c) Summer
- d) Spring

Q.18) We wear woollen clothes in :

- a) Summer
- b) Winter
- c) Spring
- d) Autumn

Q.19) Mother of your mother is your:

- a) Mother
- b) Grandmother
- c) Niece
- d) Paternal aunt

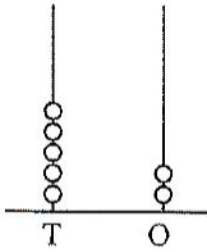
Q.20) ____ makes houses for us:
 a) Carpenter b) Mason
 c) Doctor d) Painter

Q.21) Which one of the following is true?
 a) Ten=10 b) Twelve=11
 c) Nine=19 d) Eight=80

Q.22) 4 _____ 4, Tick the correct sign:
 a) = b) <
 c) > d) None

Q.23) SUMMER – What place of E in this?
 a) Fourth b) Sixth
 c) Fifth d) Third

Q.24)



T	O
?	?

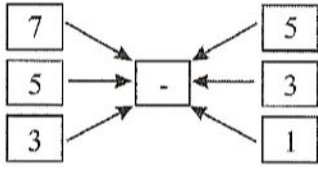
- (a) 25 (b) 50
 (c) 52 (d) 40

Q.25) 69 = _____ tens _____ one?
 a) 9,6 b) 0, 6
 c) 9, 0 d) 6, 9

Q.26) 12 + 45 = _____?
 a) 75 b) 57
 c) 50 d) 70

Q.27) 8 + 0 = _____?
 a) 0 b) 4
 c) 8 d) 1

Q.28)



- (a) 2 (b) 1
 (c) 0 (d) 3

Q.29) 8 + 6 + 4 – 6 = _____?
 a) 12 b) 11
 c) 10 d) 8

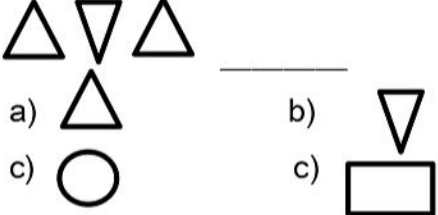
Q.30) What is one less than 90?
 a) 91 b) 89
 c) 99 d) 92

Q.31) What number will come between 29 and 31 is?
 a) 28 b) 32
 c) 27 d) 30

Q.32) Five coins of Rs.10 makes:
 a) Rs.20 b) Rs.30
 c) Rs.50 d) Rs.60


Q.33) Rs.5+Rs.15= Rs.....
 a) Rs.20 b) Rs.10
 c) Rs.15 d) Rs.5

Q.34)



Q.35) A _____ has no sides.
 a) Triangle b) Rectangle
 c) Circle d) Square

Q.36)



Which is the length ?

(a) AB (b) BC
 (c) AD (d) None

Q.37) Which is longer?



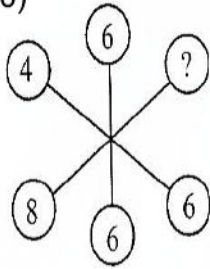
Q.38) How many Oranges do they eat in a week?

- a) 20
- b) 15
- c) 6
- d) 7

Q.39) How many apples do they eat in a week?

- a) 6
- b) 5
- c) 10
- d) 4

Q.40)



What number will come in blank circle?

- (a) 7
- (b) 6
- (c) 4
- (d) 8

Q.41) 10 times nine _____?

- a) 67
- b) 50
- c) 43
- d) 90

Q.42) Which animal is called the Ship of the Desert?

- a) Elephant
- b) Goat
- c) Camel
- d) Cow

Q.43) Mobile company by the name of fruit is _

- a) Apple
- b) Mango
- c) Grapes
- d) Litchi

Q.44) The smallest number among 740, 704, 74, 700 is _____.

- a) 740
- b) 704
- c) 74
- d) 700

Q.45) Name the game.

- a) Sack Race
- b) Relay Race
- c) 100m Race
- d) Swimming



Q.46) Name the game

- a) Football
- b) Cricket
- c) Kabaddi
- d) Basketball



Q.47) Name the famous Personality.

- a) Jawaharlal Nehru
- b) Mahatma Gandhi
- c) Subhash Chandra Bose
- d) Bhagat Singh



Q.48) Name the bird.

- a) Parrot
- b) Sparrow
- c) Pigeon
- d) Crow




Q.49) Identify the famous cricketer.

- a) Sachin Tendulkar
- b) Virat Kohli
- c) Rahul Dravid
- d) Bhuvaneshwar Kumar



Q.50) Count the number of petals in the below flower.

- a) 13
- b) 8
- c) 5
- d) 4





GEKPO GENIUS EXAM OF KIDS PRIMARY OLYMPIAD

CLASS
2

**Maximum Marks :
100**

**Duration :
90 Minutes**

**Total Question :
50**

INSTRUCTION FOR THE CANDIDATES

1. GEKPO exam is of 90 minutes duration
2. There are 50 questions in the test. Each question has only one option as CORRECT.
3. For filling up information about yourself on answer sheet.
4. Each question of carries 2 marks.
5. All the question are compulsory and there is no negative marking.
6. Use of calculator, mobile phone & any electronic gadgets is NOT allowed.
7. Write any one correct option in answer sheet.

Q.1) _____ makes food for the plant:

- a) Root b) Leaf
- c) Stem d) Bud

Q.2) Trees can live for _____ years :

- a) Many b) Few
- c) Two d) Ten

Q.3) I am a medicinal plant. I m _____

- a) Tulsi b) Banana
- c) Rice d) Rose

Q.4) Rubber is made from:

- a) Bamboo tree b) Keekar tree
- c) Cotton plant d) Rubber tree

Q.5) Cows are kept in:

- a) Shed b) Stable
- c) Pen d) Cave

Q.6) Insect that give us honey:

- a) Mosquito b) Housefly
- c) Bee d) Butterfly

Q.7) _____ is a body-building food.

- a) Milk b) Rice
- c) Potato d) Butter

Q.8) Find the odd one out:

- a) Rice b) Chapatti
- c) Butter d) Cauliflower

Q.9) How many bones are there in a human body?

- a) 203 b) 204
- c) 206 d) 210

Q.10) Our body needs:

- a) Fresh air b) Clean water
- c) Proper food d) All the above

Q.11) Do not play _____ at home.

- a) Chess b) Football
- c) Carom d) Ludo

Q.12) When a person bleeding badly what first aid you will give him?

- a) You will call the teacher
- b) You will call the police
- c) You will call the neighbours
- d) You will tie a tight cloth around the wound

Q.13) People who live near our homes are our:

- a) Relatives b) Friends
- c) Neighbours d) Classmates

Q.14) An, _____ is an automatic machine that allows people to take money out from the bank anytime.

- a) BTM b) ATM
- c) GTM d) CTM

Q.15) We use fans, coolers and air-conditioners during:

- a) Winter season
- b) Summer season
- c) Spring season
- d) Autumn season

Q.16) Main source of water is :

- a) Rain b) Pond
- c) River d) Lake

Q.17) Which one of the following is not used to wash clothes?

- a) Water b) Soap
- c) Washing powder d) Oil

Q.18) We wear _____ in school.

- a) Night suit b) Raincoat
- c) Uniform d) Party wear

Q.19) Earth takes _____ time to complete one rotation.

- a) 365 days b) One day
- c) 2 days d) Five days

Q.20) Which of the following is present on the earth?

- a) Earth b) Air
c) Water d) All the above

Q.21) What is the number of 68?

- a) Sixty Eight b) Sixty
c) Eight d) Sixty four





Q.22) What is the position of Ain BALLOON is?

- a) Second b) First
c) Third d) Fourth

Q.23) 1 ten + 8 tens + 5 tens = _____?

- a) 14 tens b) 15 tens
c) 0 tens d) 10 tens

Q.24)  - 

- a)  b) 
c)  d) 

Q.25)  x  = _____?

- a) 6 b) 10
c) 4 d) 8

Q.26) There are 7 days in a week. How many weeks are there in 42 days?


- a) 7 b) 6
c) 3 d) 4

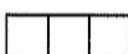



Q.27) There are 7 days in a week. How many weeks are there in 42 days?

- a) 7 b) 6
c) 3 d) 4

Q.28) Three-fourth = _____?

- a) $\frac{3}{4}$ b) $\frac{1}{3}$
c) $\frac{3}{1}$ d) $\frac{4}{3}$

Q.29)  How can we divided it in 4 equal parts?

- (a)  (b) 
(c)  (d) 





Q.30) Length of a book how would be measure?

- a) m b) cm
c) km d) 1





Q.31) 65 kg - 53 kg = _____

- a) 12 kg b) 10 kg
c) 13 kg d) 14 kg

Q.32) Which Curved Line?

- (a)  (b) 
(c)  (d) 

Q.33) Which is not a triangle?

- a)  b) 
c)  d) 

Q.34) 1 hr = _____ min

- a) 10 b) 60
c) 30 d) 45

Q.35) Which day is always holiday?

- a) Monday b) Tuesday
c) Sunday d) Wednesday

Q.36) Rs.20 = 2 notes of Rs _____


- a) 5 b) 10
c) 2 d) 20



Q.37) Rs.60 + _____ = Rs.84



- a) Rs.34 b) Rs.14
c) R.24 d) Rs.4

Q.38) 2, 5, 8, 11, 14 _____

- a) 18 b) 16
c) 17 d) 15

Q.39)  _____ ?

(a)  (b) 

(c)  (d) 

Q.48) Identify the vegetable.

- a) Spinach
- b) Tomato
- c) Carrot
- d) Peas



Q.40) How many more students play table tennis than basketball?

- a) 20
- b) 5
- c) 25
- d) 15

Q.49) Identify the famous cartoon character.

- a) Power Rangers
- b) Superman
- c) Scooby Doo
- d) Chota Bheem



Q.41) A place where ship are loaded and unloaded is _____?

- a) Bus station
- b) Police station
- c) Dock yard
- d) Air port

Q.50) Identify the country whose national flag is provided.

- a) Germany
- b) Japan
- c) USA
- d) India



Q.42) National game of India is _____.

- a) Hockey
- b) Tennis
- c) Cricket
- d) Chess

Q.43) Which bird cannot fly?

- a) PARROT
- b) PIGEON
- c) CROW
- d) OSTRICH

Q.44) How many days are there in weeks?


- a) 14 days
- b) 21 days
- c) 10 days
- d) 7 days

Q.45) Our national bird is _____.

- a) Parrot
- b) Peacock
- c) Sparrow
- d) Cuckoo

Q.46) Identify the famous places of India.

- a) Qutub Minar
- b) Taj Mahal
- c) India Gate
- d) Gateway of India



Q.47) Identify the device.

- a) Xerox Machine
- b) Fax Machine
- c) Computer
- d) Mobile Phone





GEKPO GENIUS EXAM OF KIDS PRIMARY OLYMPIAD

CLASS

3

Maximum Marks : 100	Duration : 90 Minutes	Total Question : 50
-------------------------------	---------------------------------	-------------------------------

INSTRUCTION FOR THE CANDIDATES

1. GEKPO exam is of 90 minutes duration
2. There are 50 questions in the test. Each question has only one option as CORRECT.
3. For filling up information about yourself on answer sheet.
4. Each question of carries 2 marks.
5. All the question are compulsory and there is no negative marking.
6. Use of calculator, mobile phone & any electronic gadgets is NOT allowed.
7. Write any one correct option in answer sheet.

Q.1) Choose the largest number.

- a) 721 b) 555
c) 999 d) 767

Q.2) What is correct face value of 4 in number 4562?

- a) 4000 b) 4
c) 400 d) 40

Q.3) $8592 - 0 = ?$

- a) 0 b) 1
c) 8592 d) 2

Q.4) $68 + \underline{\quad} = 48 + 68$

- a) 68 b) 48
c) 40 d) 60

Q.5) $4 \times 10 = \underline{\quad}$

- a) 5×4 b) 8×5
c) 3×6 d) 4×5

Q.6) Which one is wrong?

- a) $5 \times 6 = 30$ b) $2 \times 8 = 16$
c) $3 \times 4 = 15$ d) $4 \times 2 = 8$

Q.7) $4\sqrt{36} =$

- a) 4 b) 9
c) 8 d) 6

Q.8) There are 48 balloons. Divide these amongst 4 children equally. How much balloons every children will get?

- a) 12 b) 4
c) 40 d) 10

Q.9) Which is the correct fraction for $N=7$, $D=10$.

- a) $\frac{7}{10}$ b) $\frac{10}{7}$
c) $\frac{1}{7}$ d) $\frac{1}{10}$

Q.10) Tick the correct sign for

- a) $<$ b) $>$
c) $=$ d) None

Q.11) In a week, there are _____

- a) 6 days b) 7 days
c) 5 days d) 8 days

Q.12) 15 minutes to 5 can also be written as

- a) 4 : 50 b) 4 : 45
c) 5 : 45 d) 5 : 15

Q.13) 1 kg = _____ gm.

- a) 10 b) 100
c) 1000 d) 1

Q.14) 9 L = _____ ml.

- a) 900 b) 9
c) 9000 d) 90

Q.15) Which shape called triangle?

- a) b)
c) d)

Q.16) 12, 14, 16, 198 , _____

- a) 20 b) 22
c) 21 d) 19

Q.17) Which is odd one?

- a) Plate b) Bowl
c) Spoon d) Book

Q.18) From a meaningful word by arranging the numbers.

- | | | | |
|------------|------------|---|---|
| M | O | E | H |
| 1 | 2 | 3 | 4 |
| a) 4,3,1,2 | b) 3,2,1,4 | | |
| c) 4,2,1,3 | d) 2,3,1,4 | | |

Q.19) How many days are in the month of February?

- a) 30 b) 31
- c) 28 d) 30 or 31

Q.20) $70 \div 10 = ?$

- a) 10 b) 70
- c) 7 d) 2

Q.21) The Kitchen of the plant.

- a) Leaf b) Stem
- c) Root d) Flower

Q.22) Which plant is used for medicinal purpose?

- a) Tulsi b) Neem
- c) Turmeric d) All the above

Q.23) _____ is the tallest animal in the world.

- a) Dog b) Giraffe
- c) Camel d) Horse

Q.24) Which of the following animal is a carnivore?

- a) Deer b) Lion
- c) Elephant d) Cow

Q.25) A birds body is shape like a ____.

- a) Boat b) Train
- c) Car d) Tree

Q.26) A bird which does not built its own nest.

- a) Sparrow b) pigeon
- c) Cuckoo d) Kite

Q.27) Which organ helps us to feel changes?

- a) Eyes b) Nose
- c) Tongue d) Skin

Q.28) I am a liquid present in your mouth and helps in making food soft. Who am I?

- a) Milk b) Blood
- c) Sweat d) Saliva

Q.29) Which one of the following is not a colour of traffic light?

- a) Red b) Green
- c) Yellow d) Violet

Q.30) We should not play with _____ objects.

- a) Smooth b) Soft
- c) Sharp d) Big

Q.31) Matter exists in how many states?

- a) Two b) One
- c) Three d) Six

Q.32) Find the odd one out.

- a) Solid b) Liquid
- c) Dust d) Gas

Q.33) I am the head of the family of plants.

- a) Moon b) Earth
- c) Sun d) Mars

Q.34) How many planet are there in the solar system?

- a) Two b) Six
- c) Eight d) Ten

Q.35) Petrol is measured in.

- a) Milligram b) Litre
- c) Gram d) Metre

Q.36) Smaller amounts of liquid are measured in _____.

- a) Liters b) Milliliters
- c) Kilogram d) Kilometer

Q.37) Which among the following is the fastest means of transport?

- a) Car b) Ship
- c) Aeroplane d) Bus

Q.38) Which of the following is not used for communication?

- a) Bicycle b) E-mail
- c) Mobile phone d) Letters

Q.39) Which gas do plants absorb from air making their food?

- a) oxygen b) Carbon-di-oxide
- c) Nitrogen d) All the above

Q.40) Ice is a _____ form of a water.

- a) Liquid b) Solid
- c) Gas d) Pure

Q.41) Teachers Day is celebrated on?

- a) 5th September
- b) 5th November
- c) 5th October
- d) 5th December

Q.42) Longest river of India is?

- a) Ganga b) Mahandi
- c) Sutlej d) Krishna

Q.43) Which animal is known as the 'ship of the desert'?

- a) Tiger b) Zebra
- c) Camel d) Elephant

Q.44) Zakir Hussain is a famous Indian _____ Player.

- a) Tabla b) Sarod
- c) Flute d) Sitar

Q.45) Rupee is the currency of _____

- a) India b) USA
- c) Nepal d) UK

Q.46) Eiffel Tower is located here _____

- a) France b) Tokyo
- c) London d) Beijing

Q.47) Vande Mataram Was composed by

- a) Rabindra Nath Gagore
- b) Mahatma Gandhi
- c) Bankim Chandra Chatergee
- d) None of the above

Q.48) Which planet is known as the red planet?

- a) Mars b) Jupiter
- c) Mercury d) Venus

Q.49) Capital of Maharashtra _____.

- a) Pune b) Mumbai
- c) Nagpur d) Kolhapur

Q.50) Who was the first Indian woman to go into space?

- a) Kiran bedi b) Kalpana chawla
- c) Sania Mirza d) Saina Nehwal



GEKPO GENIUS EXAM OF KIDS PRIMARY OLYMPIAD

CLASS

4

Maximum Marks : 100	Duration : 90 Minutes	Total Question : 50
-------------------------------	---------------------------------	-------------------------------

INSTRUCTION FOR THE CANDIDATES

1. GEKPO exam is of 90 minutes duration
2. There are 50 questions in the test. Each question has only one option as CORRECT.
3. For filling up information about yourself on answer sheet.
4. Each question of carries 2 marks.
5. All the question are compulsory and there is no negative marking.
6. Use of calculator, mobile phone & any electronic gadgets is NOT allowed.
7. Write any one correct option in answer sheet.

Q.19) 1500p=Rs _____

- a) 15
- b) 30
- c) 45
- d) 40

Q.20) Rs.175.35 – Rs.152.75?

- a) Rs.20.60
- b) Rs.20.70
- c) Rs.22.60
- d) Rs.24.60

Q.21) Which part of the leaf helps in breathing?

- a) Midrib
- b) Vein
- c) Stomata
- d) Stalk

Q.22) The flattened part of a leaf is called:

- a) Vein
- b) Lamina
- c) Stalk
- d) Midrib

Q.23) Which one of the following animals is an arboreal animal?

- a) Cow
- b) Monkey
- c) Fish
- d) Frog

Q.24) Long period of summer sleep is called:

- a) Hibernation
- b) Aestivation
- c) Camouflage
- d) None of these

Q.25) The liver pours its digestive juices into the _____ intestine.

- a) Small
- b) Large
- c) Anus
- d) Rectum

Q.26) Which of the following nutrients give us energy?

- a) Fats
- b) Vitamins
- c) Minerals
- d) Proteins

Q.27) Which of these is a soft solid?

- a) Cloth
- b) Diamond
- c) Gold
- d) None of these

Q.28) Water can exist in _____ different forms.

- a) 1
- b) 3
- c) 2
- d) 5

Q.29) A ball thrown upwards falls down due to:

- a) Friction
- b) Gravitational force
- c) Muscular force
- d) Magnetic force

Q.30) Which is an example of a wedge?

- a) Scissors
- b) Axe
- c) Screw
- d) Lever

Q.31) Sea breeze blows towards :

- a) Sea
- b) Land
- c) Sky
- d) Snow

Q.32) When air moves, it is called:

- a) Breeze
- b) Storm
- c) Wind
- d) Air

Q.33) Which kinds of clothes do you wear in winter?

- a) Cotton
- b) Woolen
- c) Raincoats
- d) Silk

Q.34) _____ is obtained from silk moths :

- a) Silk
- b) Cotton
- c) Jute
- d) Plastic

Q.35) What prevents infection?

- a) First aid
- b) Antiseptic lotion
- c) Bandage
- d) Crepe bandage

Q.36) Floor must be kept dry to prevent:

- a) Skipping
- b) Sliding
- c) Running
- d) Slipping

Q.37) Before 16th Century, the earth was considered:

- a) Round
- b) Flat
- c) Elliptical
- d) Spherical

Q.38) Our earth resembles:

- a) A mango
- b) A apple
- c) An orange
- d) A banana

Q.39) Pollutants are _____ substances.

- a) useful
- b) Harmful
- c) Clean
- d) Fit

Q.40) Soil pollution makes the soil:

- a) Fertile
- b) infertile
- c) Soft
- d) Smooth

Q.41) Bhangra is the dance from which state?

- a) Rajasthan
- b) Manipur
- c) Gujarat
- d) Punjab

Q.42) Tony was in the class, _____?

- a) wasn't he
- b) were he
- c) was he
- d) weren't he

Q.43) What is the study of weather called?

- a) Biology
- b) Zoology
- c) Meteorology
- d) Trigonometry

Q.44) In this system religious leaders hold the power

- a) Monarchy
- b) Theocracy
- c) Dictatorship
- d) Democracy

Q.45) $12 \times 10 = 50 + 37 + ?$. Find the missing number

- a) 22
- b) 33
- c) 44
- d) 55

Q.46) What is the fastest land animal in the world?

- a) Horse
- b) Elephant
- c) Cheetah
- d) Giraffe

Q.47) Identify the famous sports personality

- a) Michael Jordan
- b) Lionel Messi
- c) Neymar Jr.
- d) Rafael Nadal



Q.48) Identify the machines

- a) Crane
- b) Cement Mixed
- c) Fire Brigade
- d) Bulldozer



Q.49) Peking is the old name of the country

- a) Iran
- b) Istambul
- c) Sri Lanka
- d) Beijing

Q.50) It is the planet closet to earth

- a) Mercury
- b) Venus
- c) Earth
- d) Mars



GEKPO GENIUS EXAM OF KIDS PRIMARY OLYMPIAD

CLASS

5

**Maximum Marks :
100**

**Duration :
90 Minutes**

**Total Question :
50**

INSTRUCTION FOR THE CANDIDATES

1. GEKPO exam is of 90 minutes duration
2. There are 50 questions in the test. Each question has only one option as CORRECT.
3. For filling up information about yourself on answer sheet.
4. Each question of carries 2 marks.
5. All the question are compulsory and there is no negative marking.
6. Use of calculator, mobile phone & any electronic gadgets is NOT allowed.
7. Write any one correct option in answer sheet.

Q.1 Which among the following is an effect of global warming?

- a) Melting of polar ice caps
- b) Rise in water levels of oceans
- c) Flooding of places near the sea
- d) All the above

Q.2 Which one of the following diseases is caused due to deficiency of vitamin-D?

- a) Beriberi b) Night-blindness
- c) Pellagra d) Rickets

Q.3 The outer covering that protects the baby plant inside the seed is called :

- a) Shoot b) Cotyledon
- c) Seed coat d) Bud

Q.4 On heating a solid :

- a) Contracts b) Freezes
- c) Expands d) No change

Q.4 Herbivorous animals have sharp teeth to cut grasses.

- a) Canines b) Incisors
- c) Molars d) Premolars

Q.5 Which among the following involves chemical treatment for water purification?

- a) Sedimentation b) Decantation
- c) Filtration d) Chlorination

Q.6 Non-communicable diseases are also called..... diseases:

- a) Light b) Strong
- c) Deficiency d) All the above

Q.7 A scientist who studies rocks is known as a :

- a) Zoologist b) Geologist
- c) Botanist d) Chemist

Q.8 Air blown into a flute produces sound due to:

- a) Vacuum produced in the flute
- b) Cooling of air
- c) Vibration of air
- d) Heating of air

Q.9 Which among the following is not an example of solid in water?

- a) Sugar in water b) Salt in water
- c) Alcohol in water d) Flour in water

Q.10 What is formed when sandstone undergoes several changes?

- a) Marble b) Slate
- c) Quartzite d) Shale

Q.11 A is used to split or cut wood.

- a) Pulley b) Wedge
- c) Screw d) Wheel and axle

Q.12 Which of these is a communicable disease?

- a) Rickets b) Cholera
- c) Scurvy d) Marasmus

Q.13 If you want to grow wheat crop, you will grow its seed in the month of :

- a) November b) June
- c) May d) July

Q.14 Which of the following can increase the greenhouse effect?

- a) Burning of fossil fuels
- b) Deforestation
- c) Both of them
- d) None of these

Q.15 Tsunamis are also known as :

- a) Tidal waves b) Heat waves
- c) Sun waves d) None of these

Q.16 Body of bear is covered with :

- a) Scales b) Fur
- c) Feathers d) Wings

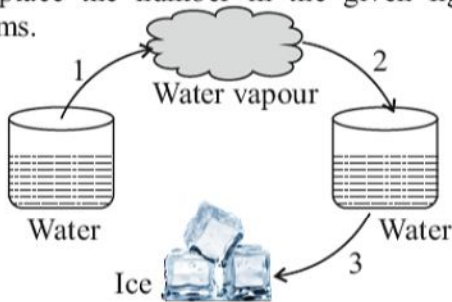
Q.17 The forces of attraction between molecules is the highest in state.

- a) liquid b) gaseous
- c) solid d) All of these

Q.18 Replace the number in the given figure by correct terms.

- a) 1"Condensation, 2"Freezing, 3"Evaporation
- b) 1"Evaporation, 2"Condensation, 3"Freezing
- c) 1"Freezing, 2"Evaporation,3"Condensation
- d) 1"Evaporation, 2"Freezing,3"Condensation

Q.19 Replace the number in the given figure by correct terms.



- a) 1→Condensation, 2→Freezing, 3→Evaporation
- b) 1→Evaporation, 2→Condensation, 3→Freezing
- c) 1→Freezing, 2→Evaporation,3→Condensation
- d) 1→Evaporation, 2→Freezing,3→Condensation

Q.20 'Energy can neither be created nor be destroyed but it can be changed from one kind to another.' - is a statement of :

- a) Law of wasting energy
- b) Law of conservation of energy
- c) Law of nature
- d) Law of gravity

Q.21 Choose correct sign for :

30, 91, 658 30, 91, 622?

- a) < b) >
- c) = d) None

Q.22 Rs. 15.50 x 6 =

- a) Rs. 93.00 b) Rs. 90
- c) Rs. 91 d) Rs. 35

Q.23 $\frac{2}{3}$ of $(9+2 \times 3) - 4$

- a) 7 b) 8
- c) 6 d) 9

Q.24 By Prime Factorization what is correct for 40?

- a) $2 \times 3 \times 5$ b) 5×5
- c) $2 \times 2 \times 3 \times 3$ d) $2 \times 2 \times 2 \times 5$

Q.25 9152 is divisible by

- a) 5 b) 3
- c) 4 d) 6

Q.26 Convert into mixed fraction.

- a) $2 \frac{1}{3}$ b) $1 \frac{1}{3}$
- c) $1 \frac{1}{3}$ d) $4 \frac{1}{3}$

Q.27 Zero point one two five =

- a) 0.152 b) 0.125
- c) 10.25 d) 1.25

Q.28 $100 + 40 + \frac{3}{100} + \frac{4}{100} =$

- a) 140.34 b) 140.304
- c) 140.034 d) 140

Q.29 Perpendicular lines make an angle of

- a) 90° b) 180°
- c) 0° d) 360°

Q.30 How many sides does Octagon have?

- a) 5 b) 6
- c) 8 d) 7

Q.31 Fractions with different denominators are called.....

- a) Like b) Proper
- c) Unlike d) Improper

Q.32 What if the successor of 54564446?

- a) 54564440 b) 54564445
- c) 54564442 d) 54564447

Q.33 To convert dam into dm, we do

- a) Addition b) Subtraction
- c) Multiplication d) Division

Q.34 4059mm = m cm mm

- a) 4m 9cm 5mm b) 40m 90cm 50mm
- c) 4m 9dm 5cm d) 4m 5cm 9mm

Q.35 $595 \times 100 = \dots\dots\dots$

- a) 595 b) 5950
- c) 59500 d) None

Q.36 12 minutes : 36 seconds.

- a) 1:20 b) 100:3
- c) 20:1 d) 3:40

Q.37 $\frac{84}{81} = \frac{28}{x}$ then $x = ?$

- a) 27 b) 36
- c) 24 d) 18

Q. 38 Convert into a decimal

- a) 0.40 b) 0.45
- c) 0.54 d) 0.20

Q.39 Sum of the smallest whole number, the smallest natural number and the smallest prime number is :

- a) 6 b) 3
- c) 4 d) 5

Q.40 The H.C.F. of two numbers is 12 and their L.C.M. is 72. If one of the number is 24. Find the other numbers.

- a) 12 b) 36
- c) 18 d) 72

Q.41 Two numbers of L.C.M. =192 and GCD=16, First number =64 which is second number?

- a) 48 b) 32
- c) 70 d) 16

Q.42 The sum of the measures of the three angles of a triangle is

- a) 180° b) 90°
- c) 360° d) 120°

Q.43 $x - 5 = -13$

- a) -8 b) 8
- c) -5 d) +15

Q.44 If $m = 7, n = 4$ then $3m + 6n = ?$

- a) 45 b) 9
- c) 11 d) 55

Q.45 Opposite sides of the quadrilateral do not have a common

- a) Vertex b) Segment
- c) Angle d) Diagonal

Q.46 The total population of a country is 8, 32, 48,000. If the number of women is 3, 88, 43, 175. Find the number of men in the country?

- a) 4, 40, 04, 825 b) 4, 44, 04, 825
- c) 1, 22, 091, 175 d) 5, 44, 04, 825

Q.47 Divide 8, 25, 476 by 175 Find Quotient and Remainder.

- a) Q-4619 Q-03 b) Q-4718 R-02
- c) Q-4819 Q-13 d) Q-4717 R-01

Q.48 Find an equivalent fraction of $\frac{15}{20}$

- a) $\frac{4}{3}$ b) $\frac{5}{3}$
- c) $\frac{3}{4}$ d) $\frac{5}{4}$

Q.49 At what price should each book be sold to get a profit of RS.240 on the 35 books purchased for Rs.2000?

- a) Rs.60 b) Rs.74
- c) Rs.64 d) Rs.62

Q.50 If the perimeter of a square is 16cm. Find the length of its side.

- a) 5cm b) 8cm
- c) 4cm d) 10cm



GEKPO GENIUS EXAM OF KIDS PRIMARY OLYMPIAD

CLASS

6

**Maximum Marks :
100**

**Duration :
90 Minutes**

**Total Question :
50**

INSTRUCTION FOR THE CANDIDATES

1. GEKPO exam is of 90 minutes duration
2. There are 50 questions in the test. Each question has only one option as CORRECT.
3. For filling up information about yourself on answer sheet.
4. Each question of carries 2 marks.
5. All the question are compulsory and there is no negative marking.
6. Use of calculator, mobile phone & any electronic gadgets is NOT allowed.
7. Write any one correct option in answer sheet.

Q.1 The surrounding where an animal lives is called a/an

- a) Adaptation b) Ecology
- c) Habitat d) Stimulus

Q.2 is a non dietary fibre food.

- a) Spinach b) Whole wheat
- c) Fish d) Bean

Q.3 Wearing away of topsoil is called :

- a) Soil conservation b) Soil erosion
- c) Noise pollution d) None of these

Q.4 The basic unit of every cloth is :

- a) Fabric b) Fibre
- c) Yarn d) Nylon

Q.5 Hand picking method is effective in :

- a) Gaseous mixture b) Solid mixture
- c) Liquid mixture d) All the above

Q.6 pollution Olympus Mons is a

- a) Tsunami b) Cyclone
- c) Volcanic Mountain d) Flood

Q.7 Which among the following is not an example of a reversible change?

- a) Dissolving sugar in water
- b) Changing of wheat to flour
- c) Folding up of a paper
- d) Melting of coaltar

Q.8 Which of the following is not required in the process of rusting?

- a) Water b) Oxygen
- c) Iron d) None of these

Q.9 A Stem modification which has fibrous roots.

- a) Beetroot b) Ginger
- c) Radish d) Turnip

Q.10 Name the substance which initiates a chemical reaction.

- a) Products b) Reactants
- c) Inhibitors d) Catalysts

Q.11 reduces the friction between different parts of a machine.

- a) Oil b) Milk
- c) Water d) Juice

Q.12 Energy can neither be created nor be destroyed but it can be changed from one kind to another - is a statement of :

- a) Law of wasting energy
- b) Law of conservation of energy
- c) Law of nature
- d) Law of gravity

Q.13 A narrow stalk, through which lamina is attached to the stem :

- a) Leaf blade b) Petal
- c) Petiole d) Vein

Q.14 Light travels in a :

- a) Circular path b) Rectilinear path
- c) Rotations path d) Triangular path

Q.15 Which of the following was not used by ancient people to cover their bodies?

- a) Big leaves of trees b) Animal skins
- c) Nylon clothes d) furs.

Q.16 What is the force of the earth that attracts object towards its centre called?

- a) Gravitational b) Magnetic
- c) Electrostatic d) Muscular

Q.17 Which process is used to separate butter from milk?

- a) Filtration b) Loading
- c) Sieving d) Churning

Q.18 Bronchitis is caused by :

- a) Air pollution b) Water pollution
- c) Soil pollution d) Noise

Q.19 The waves generated by earthquake are detected with the help of :

- a) Bar graph b) Seismograph
- c) Line graph d) Flow chart

Q.20 In a periscope two plane mirrors are fitted at its two ends in such a way that.

- a) They intersect each other
- b) They are parallel to one another
- c) They make an angle of 90° with each other
- d) None of these

Q.21 Which of the following cause severe water shortage ?

- a) Drought b) Disease
- c) Earthquake d) Poverty

Q. 22 Which of the following plants grows from stem cutting?

- a) Rose b) Bryophyllum
- c) Sweet Potato d) None of these

Q.23 The soil becomes infertile and unfit for the organisms due to

- a) Excessive use of detergents
- b) Dumping of solid wastes
- c) Release of harmful gases
- d) All of these

Q.24 On heating, movement of particles

- a) Increase
- b) Decrease
- c) Remains the same
- d) None of these

Q.25 Insoluble impurities from water can be separated by

- a) Filtration b) Distillation
- c) Evaporation d) Boiling

Q.26 Three or more points which lie on a single straight line are said to be _____

- a) Collinear points
- b) Non-collinear points
- c) Line
- d) Plane

Q.27 Which group of positive integers?

- a) 5, -9, -7 b) 2, 4, 5
- c) 3, 5, -2 d) -5, 3, 8

Q.28 Subtract $8 - (-3)$

- a) -11 b) 5
- c) 11 d) -5

Q.29 Which is biggest fraction?

- a) $\frac{31}{8}$ b) $\frac{31}{5}$
- c) $\frac{31}{9}$ d) $\frac{31}{4}$

Q.30 $\frac{3}{7} + \frac{4}{3} = ?$

- a) $\frac{28}{9}$ b) $\frac{9}{28}$
- c) $\frac{12}{21}$ d) $\frac{12}{28}$

Q.31 $\frac{25}{8} = \frac{\square}{1000} = 3.125$

- a) 3125 b) 200
- c) 312.5 d) 31.25

Q.32 $3.4 \div 5 = ?$

- a) 68 b) 6.8
- c) 0.68 d) 0.608

Q.33 In how many years will the interest be equal to the principal at 10 p.c.p.a.?

- a) 12 years b) 10 years
- c) 20 years d) Information Incomplete

Q.34 The population of a town has increased from 60,000 to 65,000. Find the increase percent.

- a) $8\frac{1}{3}\%$ b) $3\frac{1}{8}\%$ c) $8\frac{1}{4}\%$ d) $65\frac{1}{3}\%$

Q.35 Which documents are required for opening an account in a bank.

- a) Adhar Card b) Rupees
- c) Amount d) Deposit

Q.36 15% of 368 = ?

- a) 55 b) 22.5
- c) 55.2 d) 5.52

Q.37 $\frac{84}{81} = \frac{28}{x}$ then $x = ?$

- a) 27
- c) 24

- b) 36
- d) 18

Q.38 At what price should each book be sold to get a profit of RS.240 on the 35 books purchased for Rs.2000?

- a) Rs.60
- b) Rs.74
- c) Rs.64
- d) Rs.62

Q.39 The H.C.F. of two numbers is 12 and their L.C.M. is 72. If one of the number is 24.

Find the other numbers.

- a) 12
- c) 18
- b) 36
- d) 72

Q.40 $x - 5 = -13$

- a) -8
- c) -5
- b) 8
- d) +15

Q.41 Opposite sides of the quadrilateral do not have a common

- a) Vertex
- c) Angle
- b) Segment
- d) Diagonal

Q.42 If $m = 7$, $n = 4$ then $3m + 6n = ?$

- a) 45
- c) 11
- b) 9
- d) 55

Q.43 Two numbers of L.C.M. =192 and GCD=16, First number =64 which is second number?

- a) 48
- c) 70
- b) 32
- d) 16

Q.44 The sum of the measures of the three angles of a triangle is

- a) 180°
- c) 360°
- b) 90°
- d) 120°

Q.45 The total population of a country is 8, 32, 48,000. If the number of women is 3, 88, 43, 175. Find the number of men in the country?

- a) 4, 40, 04, 825
- b) 4, 44, 04, 825
- c) 1, 22, 091, 175
- d) 5, 44, 04, 825

Q.46 If the perimeter of a square is 16cm. Find the length of its side.

- a) 5cm
- c) 4cm
- b) 8cm
- d) 10cm

Q.47 12 minutes : 36 seconds.

- a) 1:20
- c) 20:1
- b) 100:3
- d) 3:40

Q.48 Find an equivalent fraction of $\frac{15}{20}$

- a) $\frac{4}{3}$
- c) $\frac{3}{4}$
- b) $\frac{5}{3}$
- d) $\frac{4}{5}$

Q.49 Divide 8, 25, 476 by 175 Find Quotient and Remainder.

- a) Q-4619 Q-03
- b) Q-4718 R-02
- c) Q-4819 Q-13
- d) Q-4717 R-01

Q. 50 Convert into a decimal

- a) 0.40
- c) 0.54
- b) 0.45
- d) 0.20